




SCHOOLHOUSE NEWS

The Purcell Register

1st Grade

Directions: Connect the dots to discover the secret animal. Be sure to start at number 1.



one hundred twenty chart

1	2	3	4	5	6	7	8	9	10
11	12	13	14	15	16	17	18	19	20
21	22	23	24	25	26	27	28	29	30
31	32	33	34	35	36	37	38	39	40
41	42	43	44	45	46	47	48	49	50
51	52	53	54	55	56	57	58	59	60
61	62	63	64	65	66	67	68	69	70
71	72	73	74	75	76	77	78	79	80
81	82	83	84	85	86	87	88	89	90
91	92	93	94	95	96	97	98	99	100
101	102	103	104	105	106			109	110
111	112	113	114	115	116	117	118	119	120

money

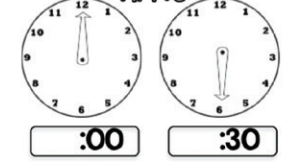


fractions

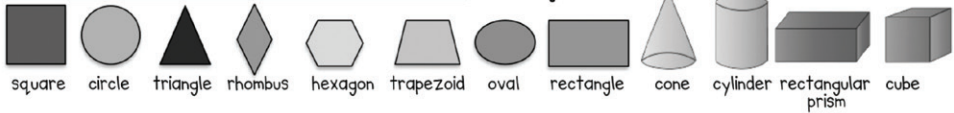
A fraction is a part of a whole.



time



shapes



Name _____

Class Fact Practice 62A

Date _____

Set 8: Adding 2; Review Facts

$$\begin{array}{r} 2 \\ + 5 \\ \hline \end{array}$$

$$\begin{array}{r} 1 \\ + 2 \\ \hline \end{array}$$

$$\begin{array}{r} 9 \\ + 2 \\ \hline \end{array}$$

$$\begin{array}{r} 7 \\ + 2 \\ \hline \end{array}$$

$$\begin{array}{r} 3 \\ + 2 \\ \hline \end{array}$$

$$\begin{array}{r} 2 \\ + 2 \\ \hline \end{array}$$

$$\begin{array}{r} 2 \\ + 6 \\ \hline \end{array}$$

$$\begin{array}{r} 2 \\ + 0 \\ \hline \end{array}$$

$$\begin{array}{r} 8 \\ + 2 \\ \hline \end{array}$$

$$\begin{array}{r} 2 \\ + 4 \\ \hline \end{array}$$

$$\begin{array}{r} 6 \\ - 0 \\ \hline \end{array}$$

$$\begin{array}{r} 1 \\ + 5 \\ \hline \end{array}$$

$$\begin{array}{r} 8 \\ + 0 \\ \hline \end{array}$$

$$\begin{array}{r} 3 \\ - 1 \\ \hline \end{array}$$

$$\begin{array}{r} 0 \\ + 6 \\ \hline \end{array}$$

$$\begin{array}{r} 5 \\ - 0 \\ \hline \end{array}$$

$$\begin{array}{r} 9 \\ - 1 \\ \hline \end{array}$$

$$\begin{array}{r} 4 \\ + 4 \\ \hline \end{array}$$

$$\begin{array}{r} 7 \\ + 1 \\ \hline \end{array}$$


$$\begin{array}{r} 3 \\ - 3 \\ \hline \end{array}$$

© Houghton Mifflin Harcourt Publishing Company and Nancy Larson.

Saxon Math 1 (for use with Lesson 62)

233

Name: _____
Write the answer for each problem. Then, color according to the key at the bottom.



- Brown 12, 15
- Yellow 7, 8, 11
- Red 5, 14
- Pink 2, 3, 17
- Green 6
- Blue 9, 10
- Purple 13, 18

Drops In The Bucket - Math Level A Number 44

Name _____ Score _____

1. Words and Concepts
1st window from the door

2. Skip Counting Patterns
5 10 15 _____ 25 _____ 35 _____ 45 _____

3. Money

4. Time
 3 o'clock

5. Geometry

6. Measurement
 _____ cm - _____ cm = _____

7. Addition Stories and Facts
$$\begin{array}{r} 0 \\ + 4 \\ \hline \end{array}$$

$$\begin{array}{r} 4 \\ + 0 \\ \hline \end{array}$$

$$\begin{array}{r} 5 \\ + 4 \\ \hline \end{array}$$

$$\begin{array}{r} 4 \\ + 5 \\ \hline \end{array}$$

8. Before and After
_____ 49 _____

9. Subtraction Stories and Facts

There are _____ more cats.

10. Counting, Place Value, or Temperature

How many? _____